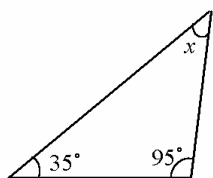
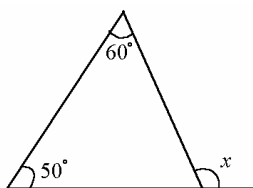


1 次の図で、 $\angle x$ の大きさを求めなさい。

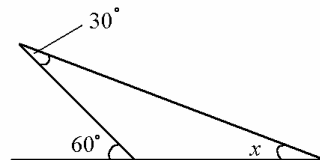
(1)



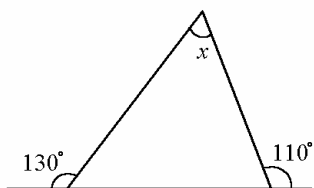
(2)



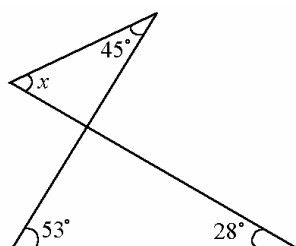
(3)



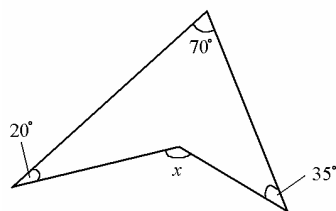
(4)



(5)

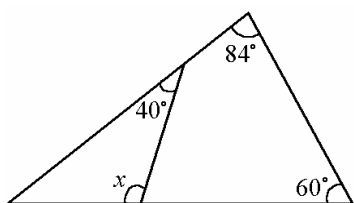


(6)

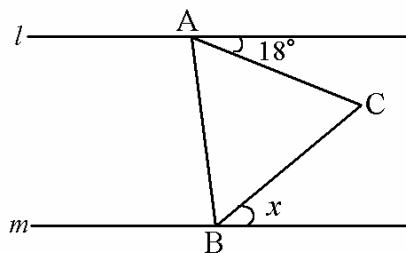


2 次の $\angle x$ を求めなさい。

(1)



(2) $\triangle ABC$ は正三角形



【解答】

1

(1) 50° (2) 110° (3) 30°

(4) 60° (5) 36° (6) 125°

2

(1) 104° (2) 42°